

Written examination in Computer Networks

March 1st 2019

Last name: _____

First name: _____

Student number: _____

I confirm with my signature that I will process the written examination alone and that I feel healthy and capable to participate this examination.
I am aware, that from the moment, when I receive the written examination, I am a participant of this examination and I will be graded.

Signature: _____

- Use the provided sheets. Own paper must *not* be used.
- You are allowed to use a *self prepared, single sided DIN-A4 sheet* in the exam. Only *handwritten originals* are allowed, but no copies.
- You are allowed to use a non-programmable calculator.
- Do *not* use a red pen.
- Time limit: *90 minutes*
- Turn off your mobile phones!

Result:

Question:	1	2	3	4	5	6	7	8	Σ	Grade
Maximum points:	22	5	10	12	12	9	10	10	90	—
Achieved points:										

1.0: 90.0-85.5, **1.3:** 85.0-81.0, **1.7:** 80.5-76.5, **2.0:** 76.0-72.0, **2.3:** 71.5-67.5,
2.7: 67.0-63.0, **3.0:** 62.5-58.5, **3.3:** 58.0-54.0, **3.7:** 53.5-49.5, **4.0:** 49.0-45.0, **5.0:** <45

Last name:

First name:

Student number:

Question 1)

Points:

Maximum points: 6

- a) What describes the physical topology of a computer network?
- b) What describes the logical topology of a computer network?
- c) Name the topology that is used by modern Ethernet standards.
- d) Name the topology that is used by Thin and Thick Ethernet.
- e) Name the topology that is used by Token Ring (physical).
- f) Name the topology that is used by Token Ring (logical).
- g) Name the topology that is used by WLAN without an Access Point.
- h) Name the topology that is used by WLAN with an Access Point.
- i) Name one topology that contains a single point of failure.
- j) Name the topology that is used by mobile phones (GSM standard).
- k) Name one topology where a cable failure causes the entire network to fail.
- l) Name one topology that has no central component.

Last name:

First name:

Student number:

Question 2)

Points:

Maximum points: 2+4+5=11

Imagine, NASA sent a spacecraft to planet Mars, which landed there. A 128 kbps (kilobit per second) point-to-point link is set up between planet Earth and the spacecraft.

The distance between Earth and Mars fluctuates between approx. 55,000,000 km and approx. 400,000,000 km. For the further calculations, we use the 55,000,000 km, which is the distance from Earth to Mars, when they are closest together.

The signal propagation speed is 299,792,458 m/s, which is the speed of light.

- a) Calculate the Round Trip Time (RTT) for the link.

$$(RTT = (2 * distance) / signal propagation speed)$$

- b) Calculate the bandwidth-delay product for the link to find out what is the maximum number of bits, that can reside inside the line between the sender and receiver?

(It is a point-to-point link \implies Transmission delay = 0s and Waiting time = 0s)

- c) A webcam at the surface of planet Mars sends pictures to Earth. Each image has a size of 10 MB (1 MB = 2^{20} Byte). How quickly, after a picture is taken, can it reach Mission Control on Earth?

Last name:

First name:

Student number:

Question 3)

Points:

Maximum points: 4+4=8

- a) Error Detection via CRC: Check, if the received frame was transmitted correctly.

Received frame: 1101001111100

Generator polynomial: 100101

- b) Transmission errors can be detected via CRC checksums. If it is important to not only recognize errors, but also to be correct them, then the data to be transmitted must be encoded in a way, that error-correction is possible. Error correction can be realized e.g. via the Simplified Hamming Code we discussed in the computer networks course.

Verify, if the following message was transmitted correctly: 00111101

Last name:

First name:

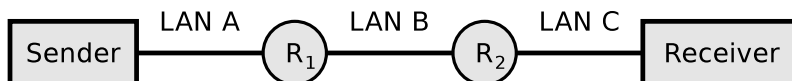
Student number:

Question 4)

Points:

Maximum points: 9

4,000 bytes payload need to be transmitted via the IP protocol.



The payload must be fragmented, because it is transmitted over multiple physical networks, whose MTU is < 4,000 bytes.

	LAN A	LAN B	LAN C
Network technology	Ethernet	PPPoE	WLAN
MTU [bytes]	1,500	1,492	2,312
IP header [bytes]	24	20	28
max. payload [bytes]			

- Calculate the max. payload [bytes] per network and fill the values into the table.
- Display graphically the way, the packet is fragmented, and how many bytes of payload each fragment contains.

Last name:

First name:

Student number:

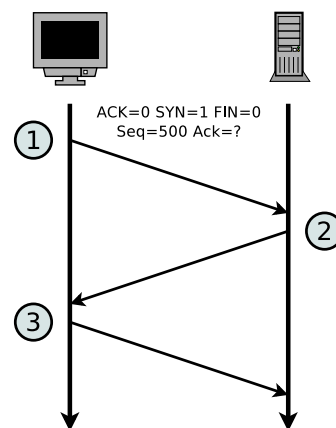
Question 5)

Points:

Maximum points: 6+9+9=24

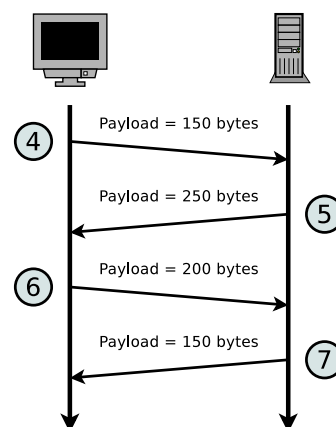
a) The diagram shows the establishment of a TCP connection. Complete the table.

Message	ACK flag	SYN flag	FIN flag	Payload length	Seq number	Ack number
1	0	1	0	0	500	
2					800	
3						



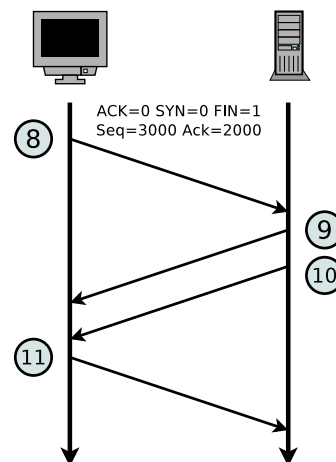
b) The diagram shows an excerpt of the transmission phase of a TCP connection. Complete the table.

Message	ACK flag	SYN flag	FIN flag	Payload length	Seq number	Ack number
4				150	1000	1300
5				250		
6				200		
7				150		



c) The diagram shows the termination of a TCP connection. Complete the table.

Message	ACK flag	SYN flag	FIN flag	Payload length	Seq number	Ack number
8	0	0	1	0	3000	2000
9						
10						
11						



Last name:

First name:

Student number:

Question 6)

Points:

Maximum points: 6

The screenshot shows a Wireshark capture of network traffic. The main pane displays a list of packets with the following details:

No.	Time	Source	Destination	Protocol	Length	Info
4	2.576155694	0.0.0.0	255.255.255.255	DHCP	342	DHCP Discover - Transaction ID 0x5e231723
6	2.766911881	192.168.178.1	255.255.255.255	DHCP	590	DHCP Offer - Transaction ID 0x5e231723
7	2.768751430	0.0.0.0	255.255.255.255	DHCP	342	DHCP Request - Transaction ID 0x5e231723
8	2.870250772	192.168.178.1	255.255.255.255	DHCP	590	DHCP ACK - Transaction ID 0x5e231723

Below the packet list, the details pane for the selected packet (No. 7) shows the following structure:

- Frame 4: 342 bytes on wire (2736 bits), 342 bytes captured (2736 bits) on interface 0
- Ethernet II, Src: PcsCompu_52:da:cd (08:00:27:52:da:cd), Dst: Broadcast (ff:ff:ff:ff:ff:ff)
- Internet Protocol Version 4, Src: 0.0.0.0, Dst: 255.255.255.255
- User Datagram Protocol, Src Port: 68, Dst Port: 67
- Bootstrap Protocol (Discover)

- a) Sketch inside the Message Sequence Chart (MSC) the sequence of the IPv4 address assignment by using DHCP. Specify for each transmitted message the transmission direction, IP addresses of sender and receiver, as well as DHCP message name.



Last name:

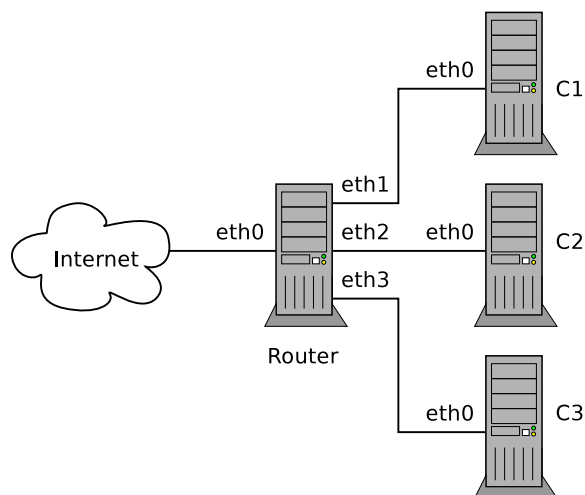
First name:

Student number:

Question 7)

Points:

Maximum points: 9



Assign valid network configurations for the computers **C1**, **C2**, and **C3** (see the Figure). Make the configurations in such a way, that a connection between the **Router** and machines **C1**, **C2** and **C3** is established.

Assign the IP addresses statically in a way that packets can be forwarded!

```

# /etc/network/interfaces
# of the Router machine

# WAN Interface
auto eth0
iface eth0 inet dhcp

# LAN 1
auto eth1
iface eth1 inet static
  address 192.168.32.1
  netmask 255.255.255.0
  broadcast 192.168.32.255

# LAN 2
auto eth2
iface eth2 inet static
  address 172.16.0.1
  netmask 255.255.224.0
  broadcast 172.16.31.255

# LAN 3
auto eth3
iface eth3 inet static
  address 10.22.0.1
  netmask 255.255.128.0
  broadcast 10.22.127.255
  
```

```

auto eth0
-----
address -----
netmask -----
gateway 192.168.32.1
  
```

/etc/network/interfaces of **C1**

```

auto eth0
-----
address -----
netmask -----
gateway 172.16.0.1
  
```

/etc/network/interfaces of **C2**

```

auto eth0
-----
address -----
netmask -----
gateway 10.22.0.1
  
```

/etc/network/interfaces of **C3**

Last name:

First name:

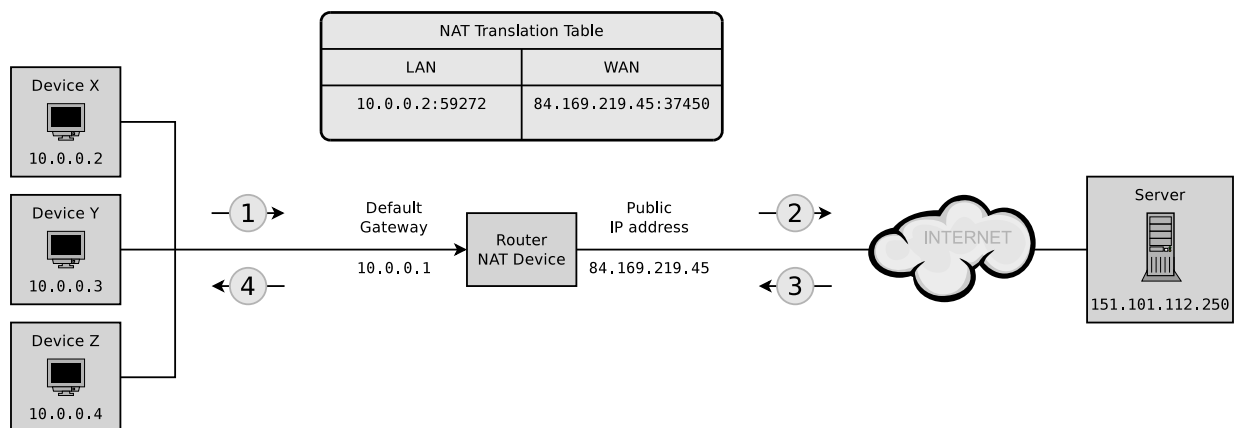
Student number:

Question 9)

Points:

Maximum points: 8

- a) Fill the missing IP addresses and port numbers into the figure that describes a NAT scenario where device X sends a request for a web page to a web server process that runs on the server and can be accessed via port number 80.



Source

Destination

- (Message 1) ____ . ____ . ____ . ____ : ____ --> ____ . ____ . ____ . ____ : ____
- (Message 2) ____ . ____ . ____ . ____ : ____ --> ____ . ____ . ____ . ____ : ____
- (Message 3) ____ . ____ . ____ . ____ : ____ --> ____ . ____ . ____ . ____ : ____
- (Message 4) ____ . ____ . ____ . ____ : ____ --> ____ . ____ . ____ . ____ : ____